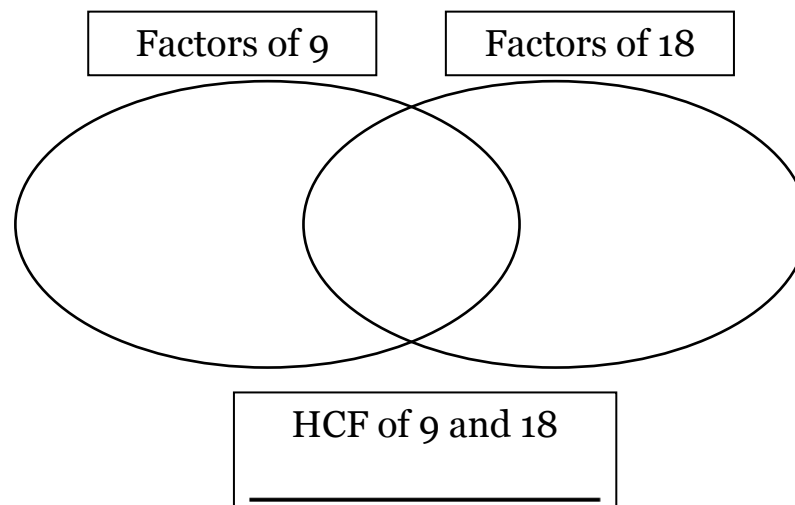
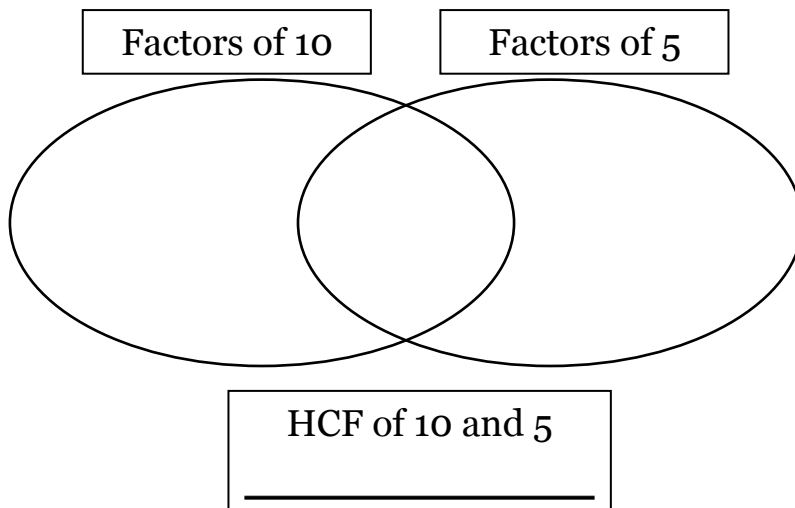
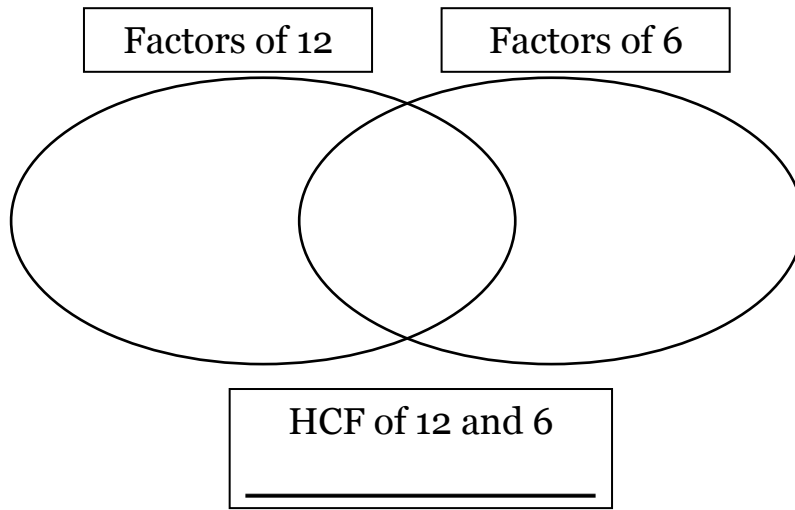
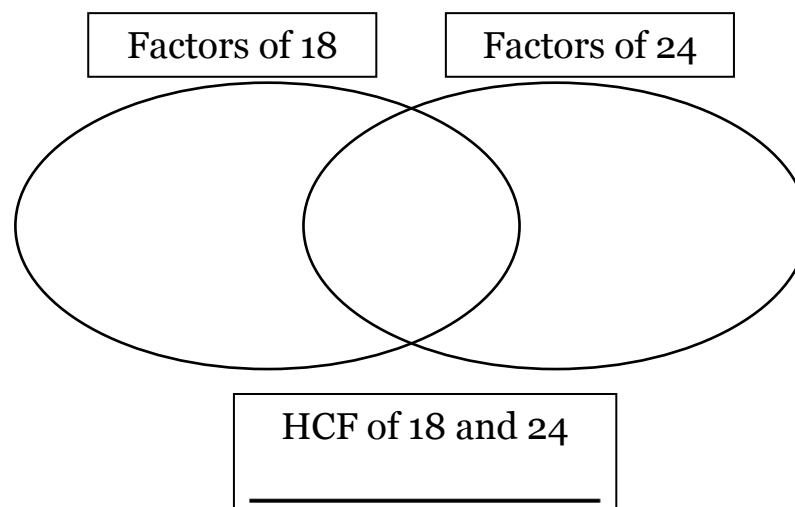
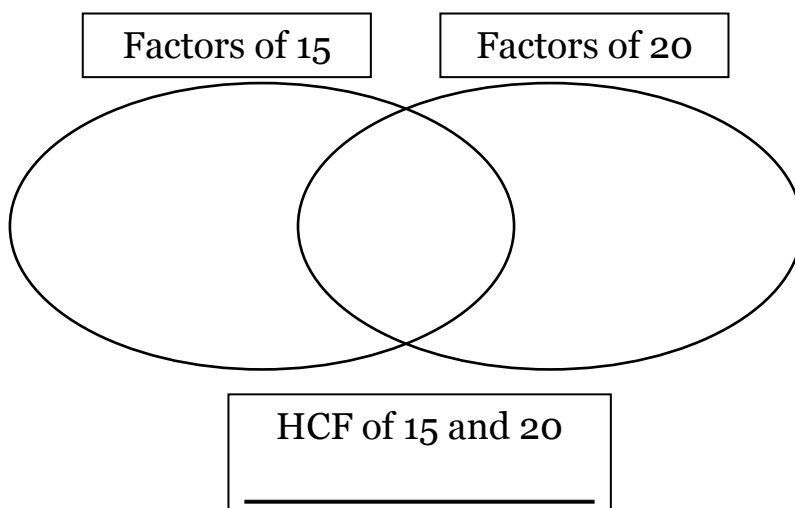
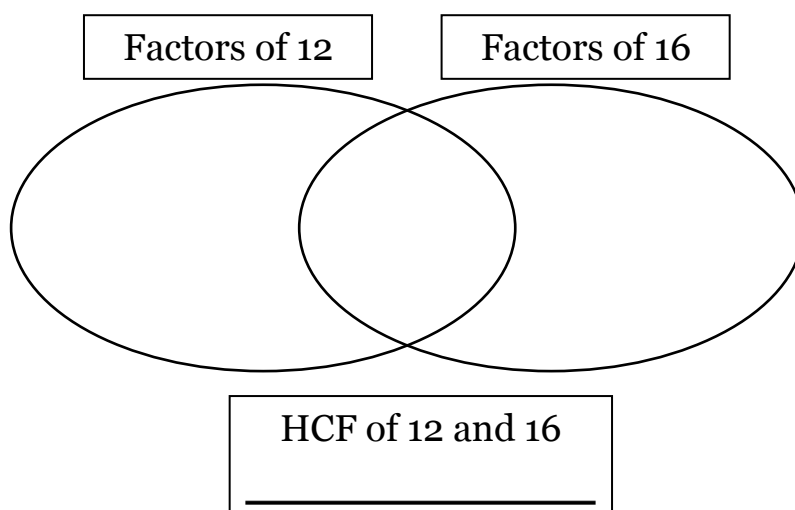




Section A





Section B



First 10 multiples of 4

○ ○ ○ ○ ○ ○ ○ ○ ○ ○ ○ ○

First 10 multiples of 6

○ ○ ○ ○ ○ ○ ○ ○ ○ ○ ○ ○

Common multiples of 4 and 6

LCM of 4 and 6

First 10 multiples of 2

○ ○ ○ ○ ○ ○ ○ ○ ○ ○ ○ ○

First 10 multiples of 5

○ ○ ○ ○ ○ ○ ○ ○ ○ ○ ○ ○

Common multiples of 2 and 5

LCM of 2 and 5

First 10 multiples of 5

○ ○ ○ ○ ○ ○ ○ ○ ○ ○ ○ ○

First 10 multiples of 8

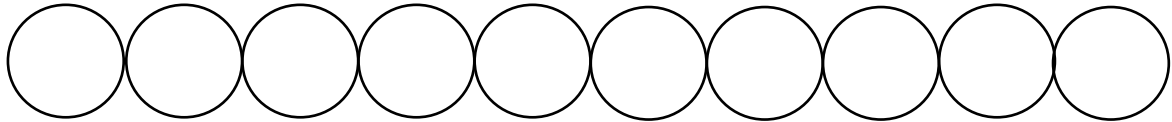
○ ○ ○ ○ ○ ○ ○ ○ ○ ○ ○ ○

Common multiples of 5 and 8

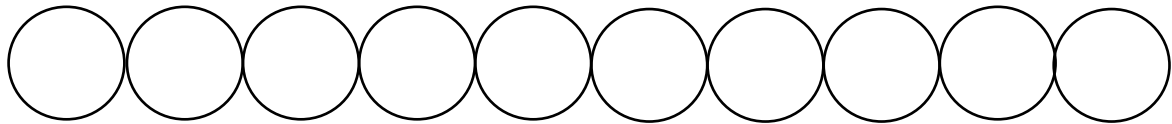
LCM of 5 and 8



First 10 multiples of 8



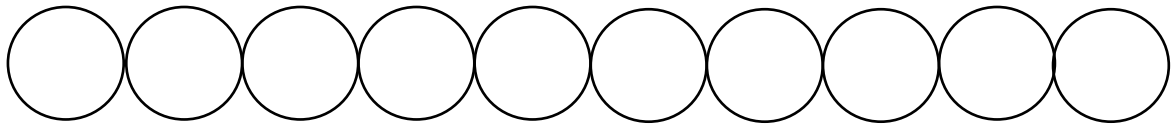
First 10 multiples of 12



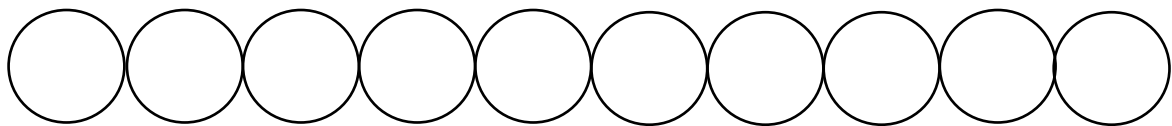
Common multiples of 8 and 12

LCM of 8 and 12

First 10 multiples of 50



First 10 multiples of 20



Common multiples of 50 and 20

LCM of 20 and 50

Section C

- 1] Find the HCF of 15 and 30
- 2] Find the LCM of 15 and 30
- 3] Find the HCF of 15 and 20
- 2] Find the LCM of 15 and 20
- 4] Find the HCF of 13 and 26
- 5] Find the LCM of 13 and 26
- 6] Find the HCF of 250 and 200
- 7] Find the LCM of 250 and 200
- 8] Find the HCF of 100 and 220